

Magnetic fields


Date

Name

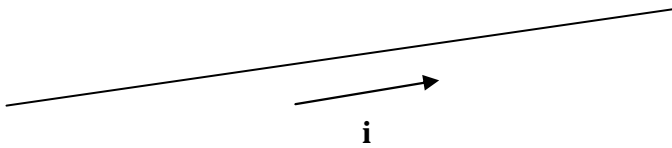
1. Draw the magnetic field around a magnetic bar



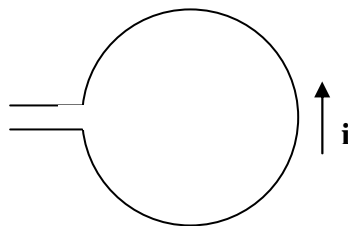
2. Draw the magnetic field around a horse shoe magnet



3. Draw the magnetic field around a current-carrying wire



4. Draw the magnetic field generated by a loop



5. Draw the magnetic field generated by a coil

